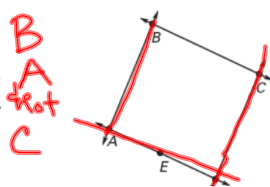


Warm-up

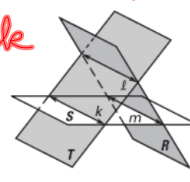
Use the diagram at the right.

- 1. Name the intersection of \overleftrightarrow{AB} and \overleftrightarrow{BC} .
- 2. Name the intersection of \overleftrightarrow{AB} and \overleftrightarrow{ED} .
- 3. Name the intersection of \overleftrightarrow{AB} and \overleftrightarrow{CD} .
- 4. Name the intersection of \overleftrightarrow{BC} and \overleftrightarrow{CD} .

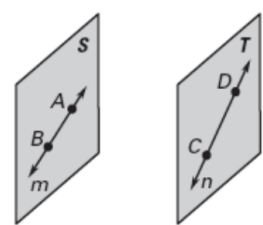


Use the diagram at the right.

- 5. Name the intersection of planes S and T.
- 6. Name the intersection of planes T and R.
- 7. Name the intersection of planes R and S.



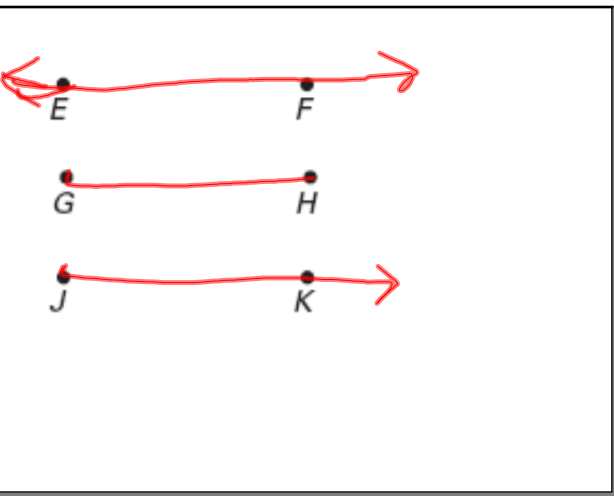
Review homework



\overleftrightarrow{CD} line m
 \overleftrightarrow{AB} line m

Sep 11-8:41 AM

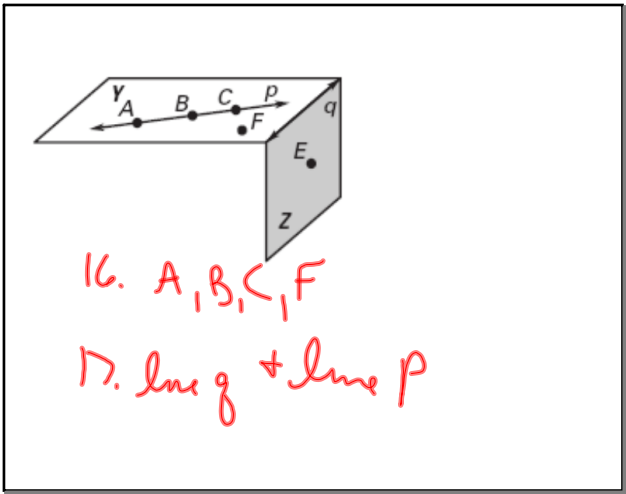
Sep 9-3:04 PM



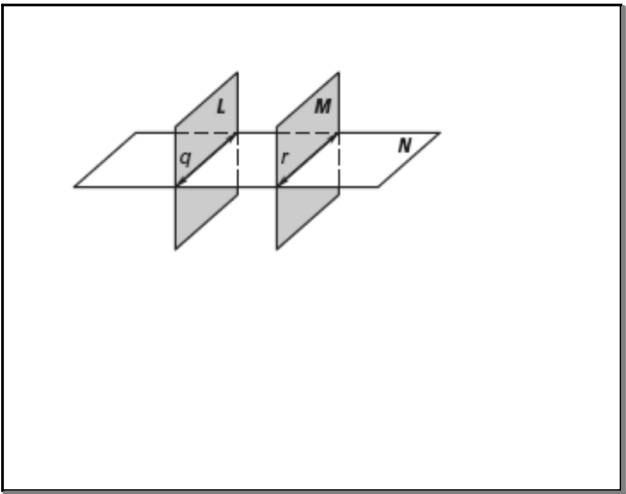
13.
collinear P, Q, R
noncollinear P, Q, S

Sep 9-3:06 PM

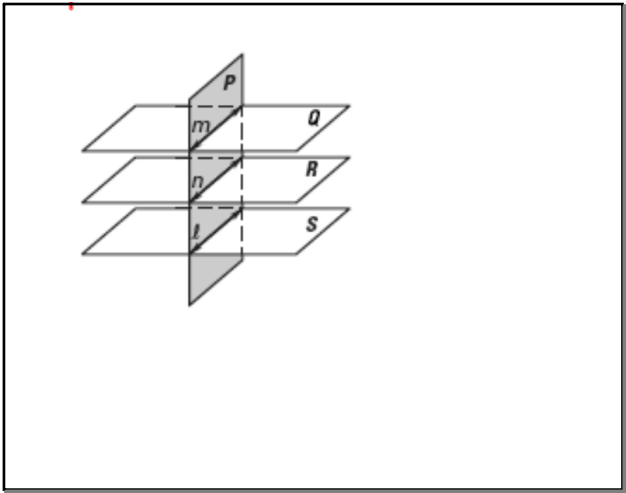
Sep 13-12:55 PM



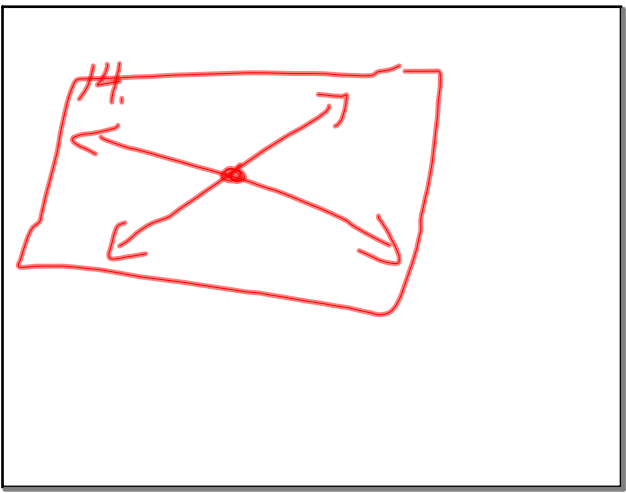
Sep 9-3:06 PM



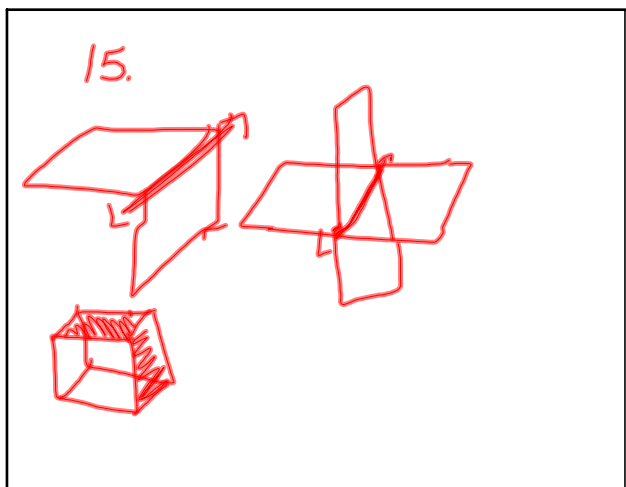
Sep 9-3:07 PM



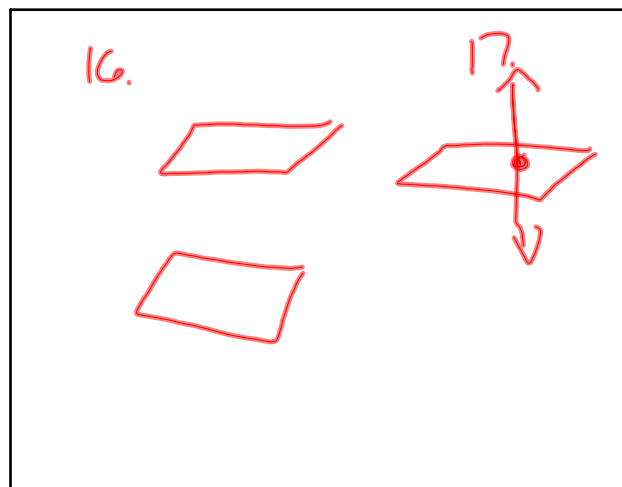
Sep 9-3:07 PM



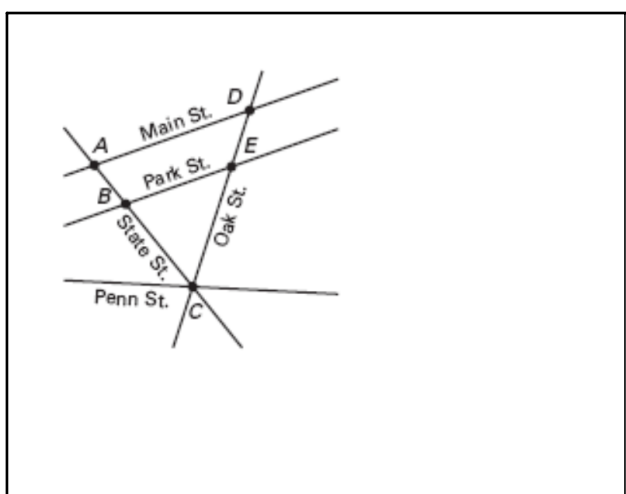
Sep 13-1:01 PM



Sep 13-1:02 PM



Sep 13-1:03 PM



Sep 9-3:07 PM

Quiz Tomorrow 1.1-1.4

- 1.1 Finding and Describing Patterns
- 1.2 Inductive Reasoning
- 1.3 Points, lines, and planes
- 1.4 Intersections

Sep 9-2:43 PM

- 1.1 Finding and Describing Patterns

Numbers *ex 3, 6, 9, ...*

Pictures *↑ ↓ ← →*

Letters *A, B, B, C, C, C,*

Sep 9-2:43 PM

- 1.2 Inductive Reasoning

Conjecture odd or even

Counterexample

Sep 9-2:43 PM

- 1.3 Points, lines, and planes

Notation *\overline{AB} \overleftrightarrow{AB} \overrightarrow{AB}*

Definitions

Drawing

Labeling

Sep 9-2:43 PM


- 1.4 Intersections

If two lines intersect, they intersect in a point.

If two planes intersect, they intersect in a line.



Sep 9-2:43 PM



Sep 9-2:53 PM